
EDEXCEL IGCSE MATHEMATICS

PAPER 1H & 1HR (LINEAR)

ALGEBRAIC PROOF

QP & MS (2018 - 2025)

$$a(b+c) = ab+ac$$
$$a \cdot b + a \cdot c$$
$$a \cdot b + ac$$
$$ab + ac$$
$$ab + ac$$

COMPILED BY:
SIR MUHAMMAD ABDULLAH SHAH



An Online Extensive Course

EDEXCEL IGCSE MATHEMATICS LINEAR FOR MAY 2026

by Sir Muhammad Abdullah Shah

Get ready for your **Edexcel IGCSE Mathematics Linear** exams with our comprehensive course designed to cover the entire syllabus and provide intense practice with past exam questions.

Registrations Open

1

Available Sessions
One-on-One

3

Starting From
All year available


2

Class Modality
Live classes on Google Meet

4

Contact Us
+92 325 3595282

Register Now

 +92 325 3595282

 exampreparena

 Exam Prep Arena



EDEXCEL IGCSE MATHEMATICS LINEAR 1H & 1HR - ALGEBRAIC PROOF

COMPILED BY SIR MUHAMMAD ABDULLAH SHAH

1. June 2025 1HR/Q20

Prove that, for any three numbers which are consecutive multiples of 4, the difference between the square of the largest number and the square of the smallest number is always a multiple of 64

Show clear algebraic working.



(Total for Question 17 is 3 marks)



EDEXCEL IGCSE MATHEMATICS LINEAR 1H & 1HR - ALGEBRAIC PROOF

COMPILED BY SIR MUHAMMAD ABDULLAH SHAH

2. Jan 2022 1HR/Q15

Using algebra, prove that, given any 3 consecutive whole numbers, the sum of the square of the smallest number and the square of the largest number is always 2 more than twice the square of the middle number.



(Total for Question 15 is 3 marks)



EDEXCEL IGCSE MATHEMATICS LINEAR 1H & 1HR - ALGEBRAIC PROOF

COMPILED BY SIR MUHAMMAD ABDULLAH SHAH

3. May 2021 1H/Q17

Using algebra, prove that, given any 3 consecutive even numbers, the difference between the square of the largest number and the square of the smallest number is always 8 times the middle number.

(Total for Question 17 is 3 marks)



EDEXCEL IGCSE MATHEMATICS LINEAR 1H & 1HR - ALGEBRAIC PROOF

COMPILED BY SIR MUHAMMAD ABDULLAH SHAH

4. May 2021 1H/Q17a

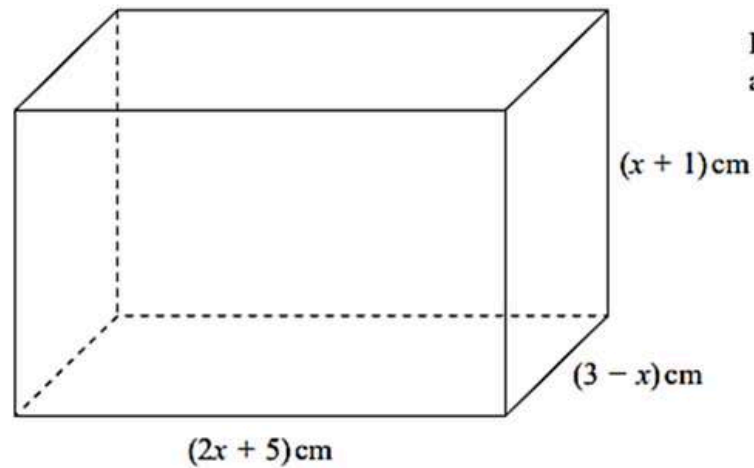


Diagram NOT accurately drawn

The diagram shows a cuboid of volume $V\text{cm}^3$

(a) Show that $V = 15 + 16x - x^2 - 2x^3$



(3)



EDEXCEL IGCSE MATHEMATICS LINEAR 1H & 1HR - ALGEBRAIC PROOF

COMPILED BY SIR MUHAMMAD ABDULLAH SHAH

5. Jan 2020 1HR/Q10

The diagram shows a regular hexagon, $ABCDEF$, and an isosceles triangle, GHI .

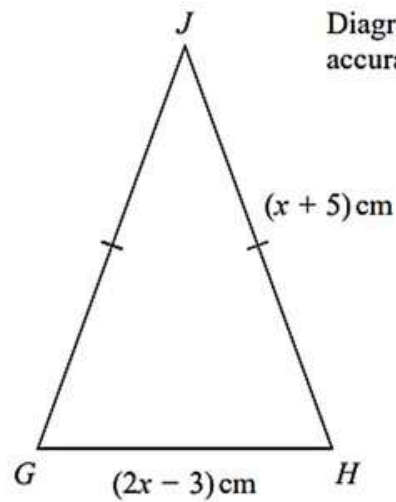
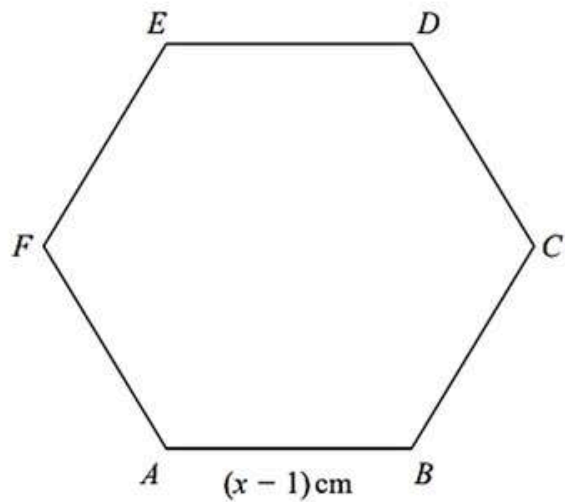


Diagram NOT accurately drawn

The perimeter of the hexagon is equal to the perimeter of the triangle.

Find the length of each side of the hexagon.

Show clear algebraic working.



..... cm

(Total for Question 10 is 5 marks)



EDEXCEL IGCSE MATHEMATICS LINEAR 1H & 1HR - ALGEBRAIC PROOF

COMPILED BY SIR MUHAMMAD ABDULLAH SHAH

6. Jan 2019 1HR/Q12

Here are the first four terms of a sequence of fractions.

$$\frac{1}{1} \quad \frac{2}{3} \quad \frac{3}{5} \quad \frac{4}{7}$$

The numerators of the fractions form the sequence of whole numbers 1 2 3 4 ...

The denominators of the fractions form the sequence of odd numbers 1 3 5 7 ...

(a) Write down an expression, in terms of n , for the n th term of this sequence of fractions.

(2)

(b) Using algebra, prove that when the square of any odd number is divided by 4 the remainder is 1

(3)

(Total for Question 12 is 5 marks)



EDEXCEL IGCSE MATHEMATICS LINEAR 1H & 1HR - ALGEBRAIC PROOF
COMPILED BY SIR MUHAMMAD ABDULLAH SHAH

7. June 2018 1HR/Q21

(a) Show that $x(x - 1)(x + 1) = x^3 - x$

(1)

(b) Prove that the difference between a whole number and the cube of this number is always a multiple of 6



(3)

(Total for Question 21 is 4 marks)




EDEXCEL IGCSE MATHEMATICS LINEAR 1H & 1HR - ALGEBRAIC PROOF

COMPILED BY SIR MUHAMMAD ABDULLAH SHAH

8. Specimen 1H/Q20

Prove algebraically that the difference between the squares of any two consecutive odd numbers is always a multiple of 8



(Total for Question 20 is 4 marks)



EDEXCEL IGCSE MATHEMATICS LINEAR 1H & 1HR - ALGEBRAIC PROOF
COMPILED BY SIR MUHAMMAD ABDULLAH SHAH

9. Sample 2018 1H/Q15a

A rectangular lawn has a length of $3x$ metres and a width of $2x$ metres.

The lawn has a path of width 1 metre on three of its sides as shown in the diagram.

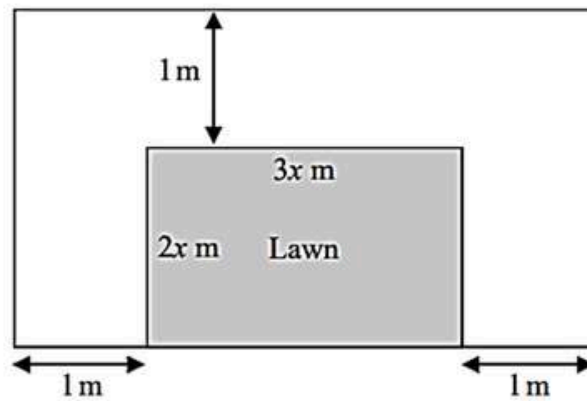


Diagram **NOT**
accurately drawn

The total area of the lawn and the path is 100m^2

(a) Show that $6x^2 + 7x - 98 = 0$



EDEXCEL IGCSE MATHEMATICS LINEAR 1H & 1HR - ALGEBRAIC PROOF
COMPILED BY SIR MUHAMMAD ABDULLAH SHAH
MARKING SCHEME

1. June 2025 1HR/Q20

17	eg $4n, 4n + 4, 4n + 8$ or $4n, 4(n + 1), 4(n+2)$ or $4n - 4, 4n, 4n + 4$ or $4(n - 1), 4n, 4(n + 1)$		3	M1 for correct expressions for 3 consecutive multiples of 4 (any letter can be used) may just see the first and third multiple for this mark
	eg $(4n + 8)^2 - (4n)^2 = 16n^2 + 64n + 64 - 16n^2$ or $(4(n + 2))^2 - (4n)^2 = 16n^2 + 64n + 64 - 16n^2$ or $(4n + 4)^2 - (4n - 4)^2 = 16n^2 + 32n + 16 - 16n^2 + 32n - 16$ or $(4(n + 1))^2 - (4(n - 1))^2 = 16n^2 + 32n + 16 - 16n^2 + 32n - 16$			M1 for squaring the largest and smallest multiple of 4 and subtracting (no need to expand or simplify for this mark)
	eg $(4n + 8)^2 - (4n)^2 = 16n^2 + 64n + 64 - 16n^2 = 64n + 64$ or $(4n + 8)^2 - (4n)^2 = (4n + 8 + 4n)(4n + 8 - 4n) = 8(8n + 8) = 64n + 64$ or $(4(n + 2))^2 - (4n)^2 = 16n^2 + 64n + 64 - 16n^2 = 64n + 64$ or $(4(n + 2))^2 - (4n)^2 = (4(n + 2) + 4n)(4(n + 2) - 4n) = 8(8n + 8) = 64n + 64$ or $(4n + 4)^2 - (4n - 4)^2 = 16n^2 + 32n + 16 - 16n^2 + 32n - 16 = 64n$ or $(4n + 4)^2 - (4n - 4)^2 = (4n + 4 + 4n - 4)(4n + 4 - 4n + 4) = 8n \times 8 = 64n$ or $(4(n + 1))^2 - (4(n - 1))^2 = 16n^2 + 32n + 16 - 16n^2 + 32n - 16 = 64n$ or $(4(n + 1))^2 - (4(n - 1))^2 = (4(n + 1) + 4(n - 4))(4(n + 1) - 4(n - 4)) = 8n \times 8 = 64n$	correctly shown		A1 dep on M2, for use of algebra to show correct conclusion
	<i>Working required</i>			Total 3 marks

2. Jan 2022 1HR/Q15

15	E.g. $n, n + 1, n + 2$ $(n^2 =)n^2$ $((n + 1)^2 =)n^2 + n + n + 1 = n^2 + 2n + 1$ oe $((n + 2)^2 =)n^2 + 2n + 2n + 4 = n^2 + 4n + 4$ oe or E.g. $n - 1, n, n + 1$ $((n - 1)^2 =)n^2 - n - n + 1 = n^2 - 2n + 1$ oe $(n^2 =)n^2$ $((n + 1)^2 =)n^2 + n + n + 1 = n^2 + 2n + 1$ oe		3	M1 for 3 appropriate terms for their 3 numbers and for correctly finding the expansion of at least 2 squares (Allow $2 \times$ middle number + 2)
	$n^2 + n^2 + 2n + 2n + 4 (= 2n^2 + 4n + 4)$ oe and $2(n + 1)^2 = 2n^2 + 2n + 2n + 2 (= 2n^2 + 4n + 2)$ oe or $n^2 - 2n + 1 + n^2 + 2n + 1 (= 2n^2 + 2)$ oe			M1 for finding the sum of first and last square and double the square of the middle (Allow $2 \times$ middle number + 2)
	E.g. $2n^2 + 4n + 4 = 2n^2 + 4n + 2 + 2$ oe or $2(x + 1)^2 + 2 = 2(x + 1)^2 + 2$ oe or $2n^2 + 2 = 2n^2 + 2$ oe	Complete proof		A1 for conclusion from two correct expressions e.g. $2n^2 + 4n + 4$ and $2n^2 + 4n + 2$
				Total 3 marks



EDEXCEL IGCSE MATHEMATICS LINEAR 1H & 1HR - ALGEBRAIC PROOF
COMPILED BY SIR MUHAMMAD ABDULLAH SHAH

3. May 2021 1H/Q17

17	eg $2n, 2n+2, 2n+4$ or $2n-2, 2n, 2n+2$ etc		3	M1 3 consecutive even numbers in algebraic form (any letter can be used)
	eg $(2n+4)^2 - (2n)^2$ ($= 4n^2 + 8n + 8n + 16 - 4n^2 (= 16n + 16)$) or $(2n+2)^2 - (2n-2)^2$ ($= 4n^2 + 4n + 4n + 4 - (4n^2 - 4n - 4n + 4) (= 16n)$)			M1 for squaring the largest and smallest even numbers and subtracting (no need to expand or simplify for this mark)
	eg $8(2n+2) = 16n + 16$ or eg $16n + 16 = 8(2n+2)$ or eg $16n = 8(2n)$ or eg $8n + 8n = 8(n+n)$ or eg $\frac{16n+16}{2n+2} = 8$	Correctly shown		A1 dep on M2 for use of algebra to show correct conclusion (SCB1 for eg $(p+4)^2 - p^2$) (SCB2 for use of eg $(p+4)^2 - p^2 = 8p + 16 = 8(p+2)$ If the student shows this and also says "it is true for all numbers, so it must be true for even numbers" oe then this would gain M2A1
	Alternative			Total 3 marks
	eg a, b, c are consecutive even numbers where $a < b < c$ and one of $b = \frac{a+c}{2}$ or $a+c = 2b$ or $c - a = 4$ oe		3	M1 3 numbers defined as consecutive even numbers with one correct equation, writing one term in terms of one or more of the others or $c - a = 4$
	eg a, b, c are consecutive even numbers where $a < b < c$ and all of $b = \frac{a+c}{2}$ and $a+c = 2b$ and $c - a = 4$ oe			M1 3 numbers defined as consecutive even numbers with three correct equations that involve all letters in some place
	Now $c^2 - a^2 = (c-a)(c+a) = 4 \times 2b = 8b$	Correctly shown		A1 dep on M2 for use of algebra to show correct conclusion
				Total 3 marks

4. May 2021 1H/Q17a

15	(a)	$(2x+5)(x+1) = 2x^2 + 2x + 5x + 5$ ($= 2x^2 + 7x + 5$) or $(x+1)(3-x) = -x^2 + 3x - x + 3$ ($= -x^2 + 2x + 3$) or $(3-x)(2x+5) = -2x^2 + 6x - 5x + 15$ ($= -2x^2 + x + 15$)		3	M1 for multiplying out two brackets correctly at least 3 terms correct	M2 for at least 4 terms correct out of a maximum of 8 terms $6x^2 - 2x^3 + 6x - 2x^2 + 15x - 5x^2 + 15 - 5x$
		E.g. [[$(2x^2 + 7x + 5)(3-x) =$] $-2x^3 - 7x^2 - 5x + 6x^2 + 21x + 15$ or [[$(-x^2 + 2x + 3)(2x+5) =$] $-2x^3 - 5x^2 + 10x + 4x^2 + 6x + 15$ or [[$(-2x^2 + x + 15)(x+1) =$] $-2x^3 - 2x^2 + 15x + x^2 + x + 15$			M1 for at least 3 terms correct out of a maximum of 6 terms or for at least 4 terms correct out of a maximum of 8 terms	
			Shown		A1	

5. Jan 2020 1HR/Q10

10	e.g. $6(x-1) (= 6x-6)$				M1 method to find expression for perimeter of hexagon
	e.g. $2(x+5) + 2x - 3 (= 4x+7)$				M1 method to find expression for perimeter of triangle
	" $6x-6$ " = " $4x+7$ "				M1 (dep on at least M1) for equating both expressions
	e.g. $6x - 4x = 7 + 6$				M1 (dep on previous M1 and equation of the form $ax + b = cx + d$) for rearranging the x terms on one side and the numerical terms on the other and all expansions correct.
		5.5	5	A1	oe (dep on M2)
					Total 5 marks



EDEXCEL IGCSE MATHEMATICS LINEAR 1H & 1HR - ALGEBRAIC PROOF
COMPILED BY SIR MUHAMMAD ABDULLAH SHAH

6. Jan 2019 1HR/Q12

12	(a)		$\frac{n}{2n-1}$	2	M1	for $2n \pm k$ oe as the denominator
	(b)	$(2n-1)^2 = 4n^2 - 4n + 1$	Proved	3	A1	oe
		$4(n^2 - n) + 1$ or $\frac{4n^2 - 4n + 1}{4} = n^2 - n + \frac{1}{4}$			M1	or $(2n+1)^2 = 4n^2 + 4n + 1$ ft on $2n \pm k$ (k non zero)
					M1	or $4(n^2 + n) + 1$ or $\frac{4n^2 + 4n + 1}{4} = n^2 + n + \frac{1}{4}$
					A1	Conclusion

7. June 2018 1HR/Q21

21	(a)	$x(x^2 - 1)$ or $(x^2 - x)(x + 1)$	$x^3 - x$	1	B1	for correct expansion of a pair of brackets and then $x^3 - x$ written down
	(b)	(One of the numbers) is even or multiple of 2 or 2 is a factor	Proof	3	M1	
		(One of the numbers) is a multiple of 3 or 3 is a factor			M1	
		Hence a multiple of 6			A1	
						Total 4 marks

8. Specimen 1H/Q20

20	eg. $2n + 1, 2n + 3$				M1	for algebraic representation of two consecutive odd numbers
	$(2n + 3)^2 - (2n + 1)^2 =$ $(4n^2 + 6n + 6n + 9) - (4n^2 + 2n + 2n + 1)$				M1	for correct expansion of at least one bracket
	$8n + 8$				M1	for simplified answer, may be factorised
		proof	4		A1	for completion of proof
						Total 4 marks

9. Sample 2018 1H/Q15a

Question	Working	Answer	Mark	AO	Notes
15 a	$(3x + 2)(2x + 1) = 100$	$6x^2 + 7x - 98 = 0$ *	2	AO1, AO2	M1 or $(2x \times 3x) + 2(2x + 1) + 3x = 100$ oe or $(2x \times 3x) + (2 \times 2x (\times 1)) + 1 + 3x + 1 + 1 = 100$ oe other partitions are acceptable but partitioning must go on to form a correct equation. A1 Accept $6x^2 + 7x + 2 = 100$ if M1 awarded * Answer given

